


Patterns and Relations
Unit 2 Line Master 5

How many xihwu (urchins)?




Roll three number cubes.

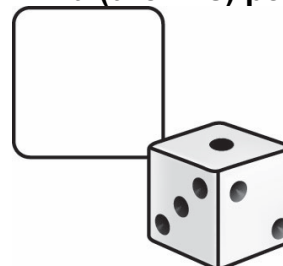
- Put one number cube in each box to show how many the raven ate, how many are carried each trip, and how many trips there were.
- Use the values to complete the table.
- Write an equation to represent the relation.
- The player with the greater number of xihwu after the given number of trips gets one point.

Equation:	
Number of trips	Number of xihwu (urchins)
0	
1	
2	
3	
4	
5	
6	

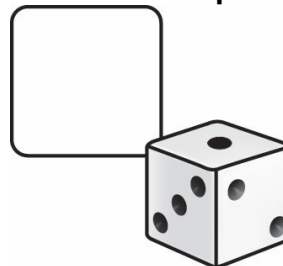
Raven ate:



Xihwu (urchins) per trip:



Number of trips:



Adapted from Numeracy Explorations through Coast Salish Story by Tannis Reis Calder (sd68)